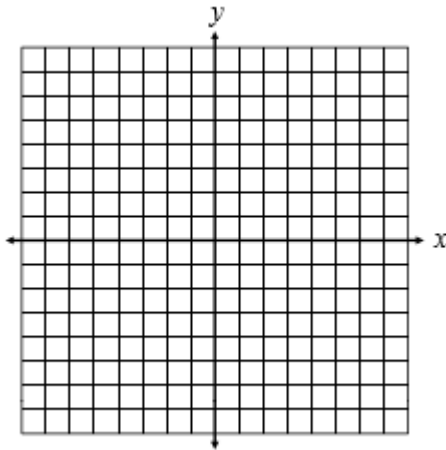


Name \_\_\_\_\_

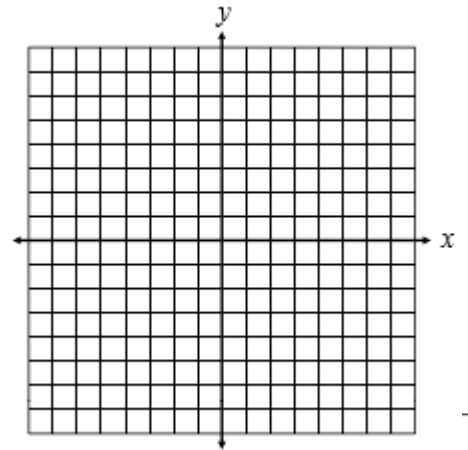
### QUIZ STUDY GUIDE 3/14/19

Graph each line. Give the slope-intercept form for all standard form equations.

1.  $y = 4x - 6$

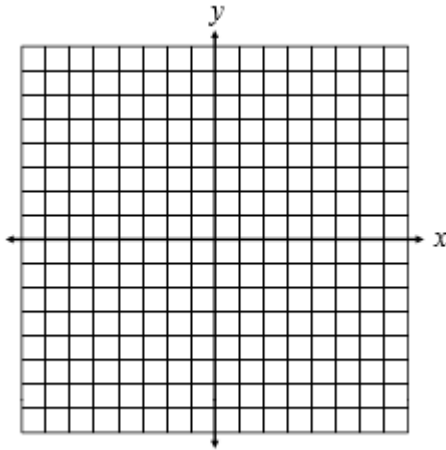


2.  $y = -\frac{3}{7}x + 1$



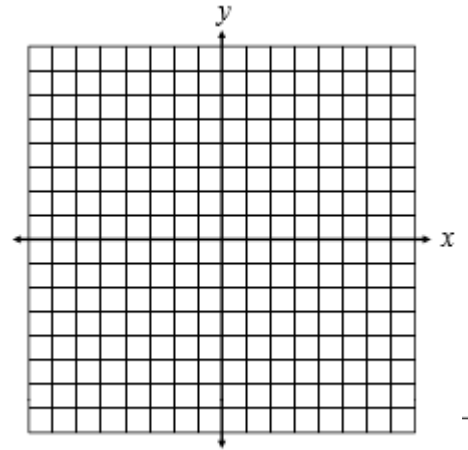
3.  $x + y = 3$

**Slope-Intercept Form**



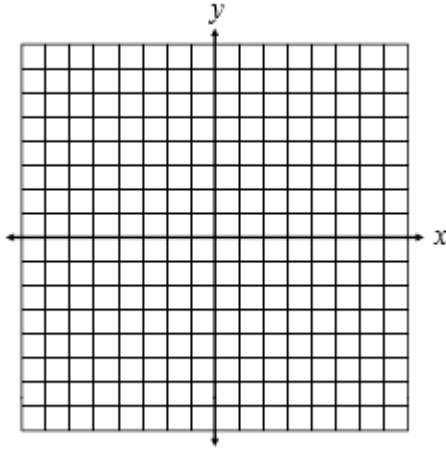
4.  $-x + 3y = 15$

**Slope-Intercept Form**



5.  $5x + 2y = -14$

**Slope-Intercept Form**



6.  $2x - y = 0$

**Slope-Intercept Form**

